

GUIA TRABAJO MATEMÁTICA 1° BÁSICO






PROFESORA VIVIANA BURGOS HERNÁNDEZ

SEMANA DEL 25 AL 29 DE MAYO






1. OBSERVA EL VIDEO, ANTES DE DESARROLLAR LA GUÍA
2. RECUERDA QUE PUEDES UTILIZAR MATERIALES QUE TENGAS EN CASA: AUTITOS, LEGOS, BOLITAS, LOL, ETC.
3. CUENTA EN VOZ ALTA Y ESCRIBE LA CANTIDAD QUE HAY DE CADA DIBUJO. PINTA SI DESEAS.

The worksheet is divided into two main sections by a horizontal dashed line. The upper section contains ten line drawings of three mushrooms with smiling faces and seven birds. The lower section contains three line drawings: a bird, a flower, and a mushroom. Below each of these three drawings is a circle with a dashed horizontal line inside, intended for the student to write the count of each object.

4. CUENTA CADA FILA DE PERRITOS Y ESCRIBE EL NÚMERO.

	=	-----
	=	-----
	=	-----
	=	-----
	=	-----

5. CUENTA LOS ANIMALES Y ESCRIBE EL NÚMERO, PINTALOS.

	=	-----
	=	-----
	=	-----
	=	-----
	=	-----

6. CUENTA LOS DIBUJOS Y REALIZA LAS SUMAS, ESCRIBE LOS RESULTADOS COMO EL EJEMPLO, PÍNTALOS.

4

2 octopuses + 2 octopuses =

2 cows + 3 cows =

4 birds + 3 birds =

4 cats + 3 cats =

3 monkeys + 3 monkeys =

3 ice cream cones + 3 ice cream cones = 6 ice cream cones

7 cookies + 1 cookie = 8 cookies

5 cupcakes + 4 cupcakes = 9 cupcakes


4 ice cream cones + 4 ice cream cones = 8 ice cream cones

3 donuts + 3 donuts = 6 donuts

7. REALIZA LAS SUMAS CONTANDO LOS DIBUJOS O MIRANDO LOS NÚMEROS.




$$4 + 1 = \square$$



$$2 + 2 = \square$$




$$3 + 2 = \square$$





$$2 + 5 = \square$$



$$4 + 2 = \square$$



$6+2=$




$3+7=$




$5+4=$




$8+1=$



$9+0=$



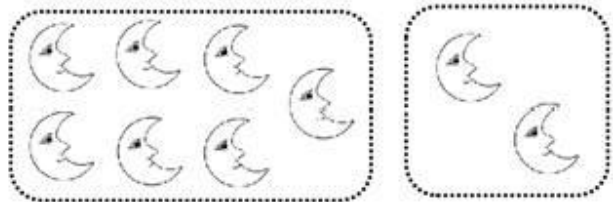
$6+4=$



$2+8=$



$5+1=$








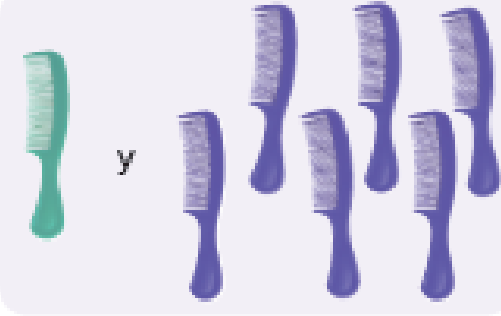


$7+2=$



$1+1=$

8. OBSERVA CADA EJERCICIO, CUENTA LOS ELEMENTOS , ESCRIBE EL NÚMERO Y LUEGO RESUELVE LAS SUMAS.

 $2 + 1 = 3$	 $_ + _ = \square$
 $_ + _ = \square$	 $_ + _ = \square$
 $\square + \square = \square$	<p>c.</p>  $\square + \square = \square$
 $\square + \square = \square$	<p>d.</p>  $\square + \square = \square$